

LO: to read time to the nearest 5 minuteDecide whether each clock is showing **past** or **to** and then complete the minutes or hour.

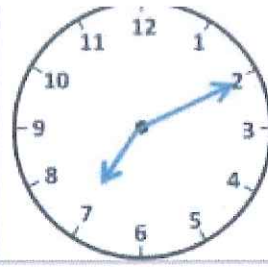
5 minutes

past  
2



25 minutes

past  
8



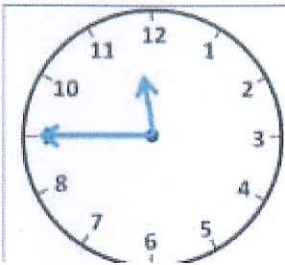
10 minutes

past  
7



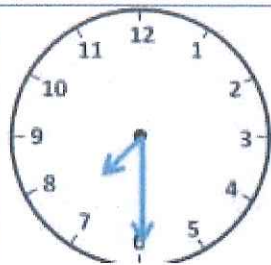
10 minutes

to  
4



Quarter

to  
12



half  
past  
7



20 minutes

to  
3

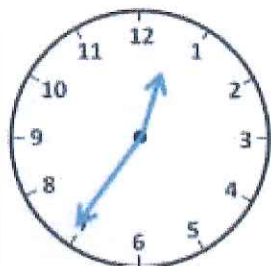


3  
o'clock



10 minutes

to  
9



25 minutes

to  
1



Quarter

past  
11



20 minutes

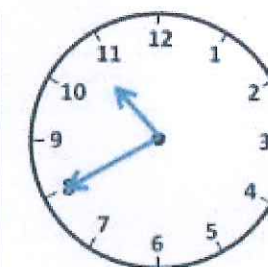
past  
5



5 minutes  
to  
4



25 minutes  
past  
3



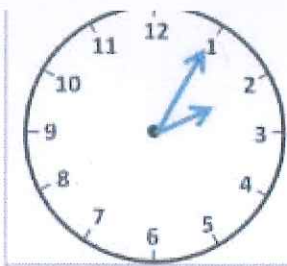
20 minutes  
to  
11



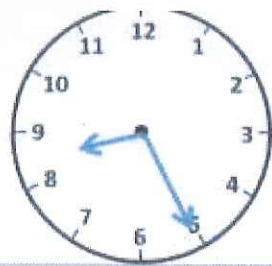
15 minutes  
to  
7

LO: to read time to the nearest 5 minute

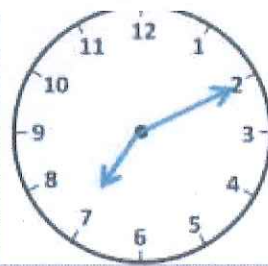
Write the time shown in words. E.g. 20 minutes past 5



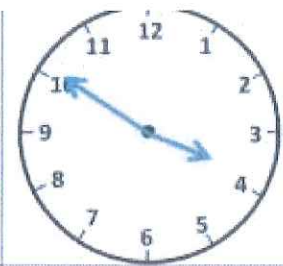
5 minutes past 2



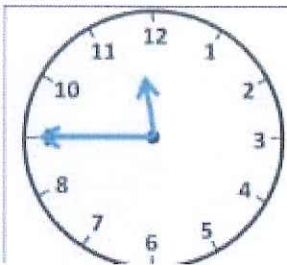
25 minutes past 8



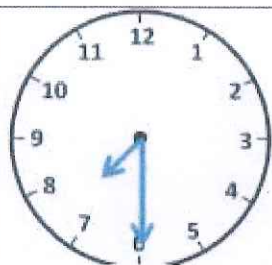
10 minutes past 7



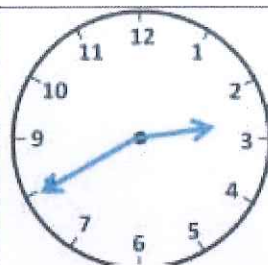
10 minutes to 4



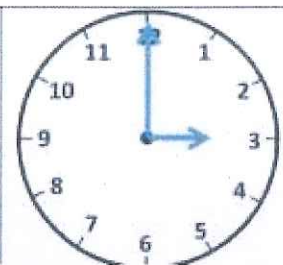
Quarter to 12



half past 7



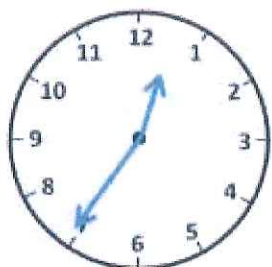
20 minutes to 3



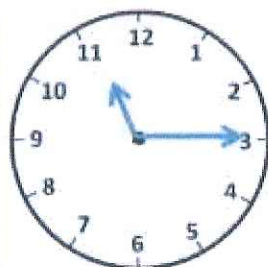
3 o'clock



10 minutes to 9



25 minutes to 1



Quarter past 11



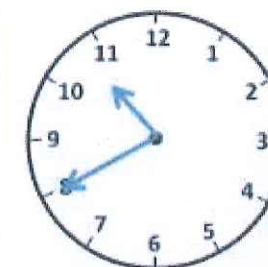
20 minutes past 5



5 minutes to 4



25 minutes past 3



20 minutes to 11

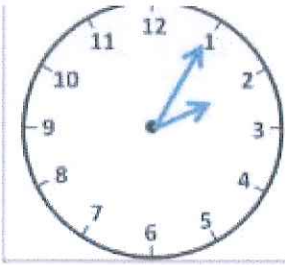


15 minutes to 7



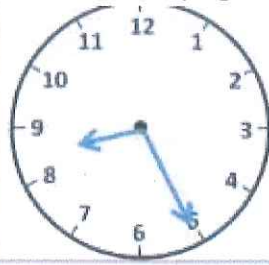
LO: to read time to the nearest 5 minute

Write the time shown in words (e.g. 20 minutes past 5) and digital time (e.g. 5:20)



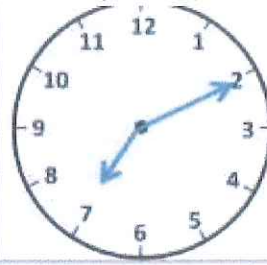
Words:  
5 minutes  
past  
2

Digital: 2:05



Words:  
25 minutes  
past  
8

Digital: 8:25



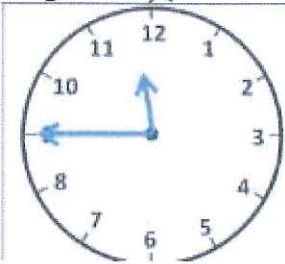
Words:  
10 minutes  
past  
7

Digital: 7:10



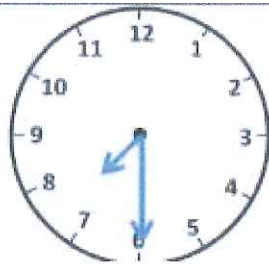
Words:  
10 minutes  
to 4

Digital: 3:50



Words:  
Quarter to  
12

Digital: 11:45



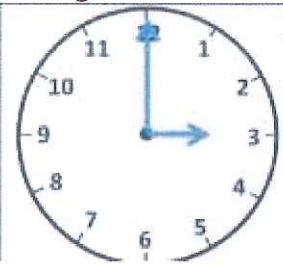
Words:  
half past  
7

Digital: 7:30



Words:  
20 minutes  
to 3

Digital: 2:40



Words:  
3 o'clock

Digital: 3:00



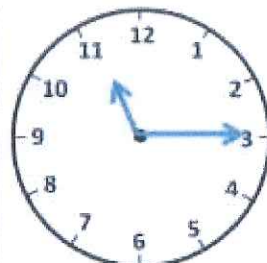
Words:  
10 minutes  
to  
9

Digital: 8:50



Words:  
25 minutes  
to 1

Digital: 12:35



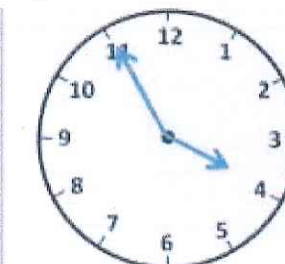
Words:  
Quarter past  
11

Digital: 11:15



Words:  
20 minutes  
past 5

Digital: 5:20



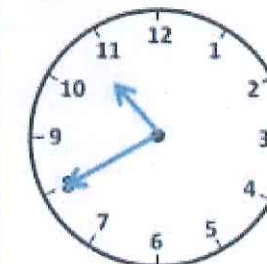
Words:  
5 minutes  
to 4

Digital: 3:55



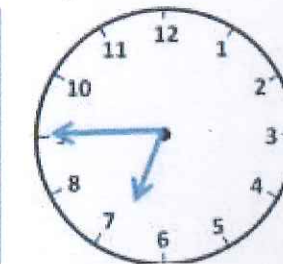
Words:  
25 minutes  
past 3

Digital: 3:25



Words:  
20 minutes  
to 11

Digital: 10:40



Words:  
15 minutes  
to 7

Digital: 6:45